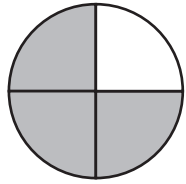


Fractions

Name: _____

What fraction of each shape is shaded? Circle the correct answer.

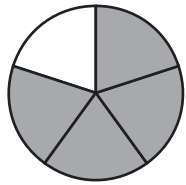


$\frac{1}{4}$

$\frac{3}{4}$

$\frac{2}{4}$

$\frac{3}{5}$

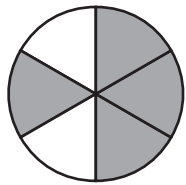


$\frac{4}{5}$

$\frac{3}{5}$

$\frac{3}{4}$

$\frac{5}{6}$

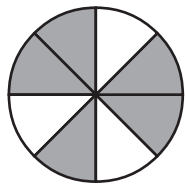


$\frac{4}{7}$

$\frac{3}{6}$

$\frac{2}{6}$

$\frac{4}{6}$

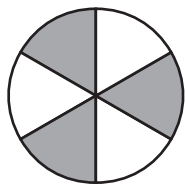


$\frac{3}{8}$

$\frac{5}{8}$

$\frac{4}{8}$

$\frac{5}{9}$

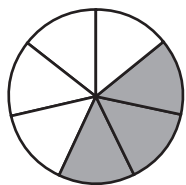


$\frac{3}{6}$

$\frac{3}{3}$

$\frac{2}{6}$

$\frac{3}{4}$

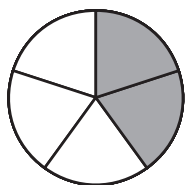


$\frac{4}{7}$

$\frac{2}{7}$

$\frac{3}{4}$

$\frac{3}{7}$



$\frac{3}{5}$

$\frac{2}{5}$

$\frac{2}{3}$

$\frac{4}{6}$